

One more one less

0-50.

Fluency

1

Fill in the blanks:



There are ___ donuts.



One more than ___ is ___.



There are ___ donuts.



One less than ___ is ___.


2

Build and find one more and one less.



One more than ___ is ___.

One less than ___ is ___.



One more than ___ is ___.

One less than ___ is ___.



3

Find one more and one less:

One less than ___ is ___.



One more than ___ is ___.



Problem solving.

19	20	21	23	24	25	26	27	28	29
----	----	----	----	----	----	----	----	----	----

One more than 21 is 23

Do you agree?

Explain your answer.