




One more one less

0-100.

Fluency

- 1 Show one more and one less than the numbers given.

One less		One more
		
		
		

- 2 Find the missing numbers.


		37			
	46	47			
55		57			
65					

- 3 Use the number cards to make 2 digit numbers.  
Now write down one more and one less than the numbers you have made.  
Use equipment if needed.



*Problem solving.*

Iqra started with this number.



Has Iqra shown the correct amount?  
Explain how you know.

---