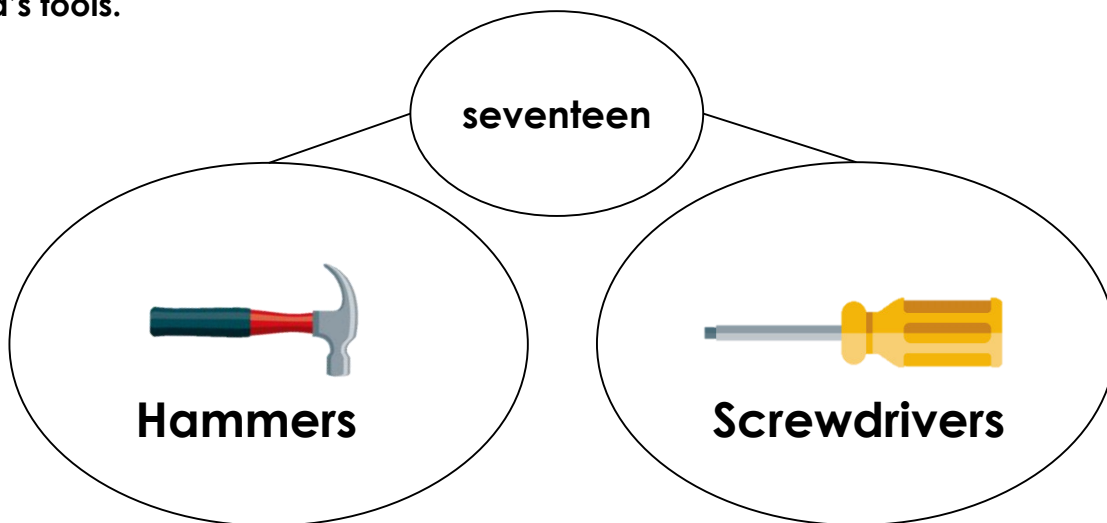


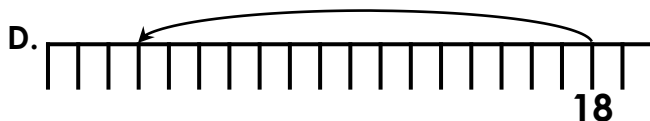
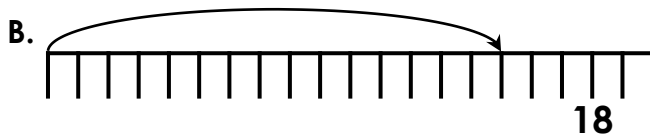
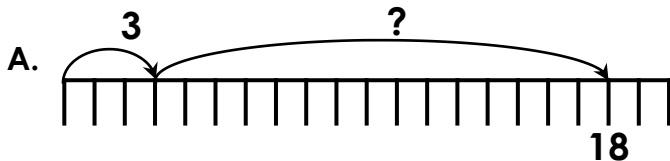
Fact Families

7. Sacha has 17 tools. Using +, - and = write the 4 number sentences that could show Sacha's tools.



VF
HW/Ext

8. Use the bar model to complete the number lines below.



VF
HW/Ext

9. Use the cards to make four fact family number sentences within twenty. Complete the part-whole model and ten frames to match your sentences.

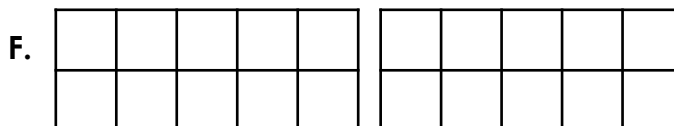
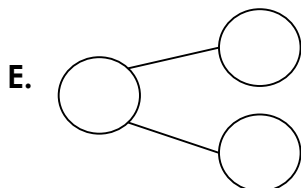
one	two	three	four	five	six	seven	eight	nine	ten
-----	-----	-------	------	------	-----	-------	-------	------	-----

A. $\square + \square = \square$

B. $\square + \square = \square$

C. $\square - \square = \square$

D. $\square - \square = \square$



RPS
HW/Ext