

## Year 1 Base 10 Activities.

0-100.


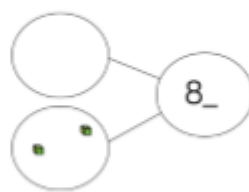
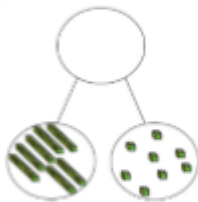
### Fluency.

- 1 Use Base 10 to make these numbers then complete the stem sentences.

70    96    64    81    92    66    99

**70** has **7** tens and **0** ones.

- 2 Complete the part whole models.



- 3 Show these numbers using a place value chart and Base 10 or straws.

Tens	Ones

73	50
88	79
91	85
62	93

### Problem solving.

Use Base 10 to make a number.

With 5 tens and less than 8 ones

How many possible numbers are there?

I have 9 ones



Marvin



Scott

I only have 4  
tens so your  
number must  
be bigger  
than mine

Is Scott correct?  
Prove it.

---