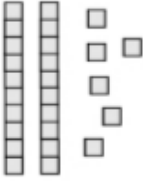
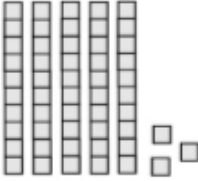

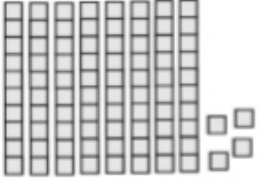
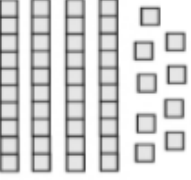

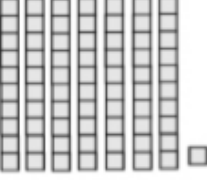
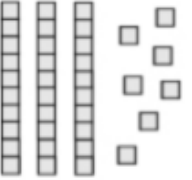


# Year 1 Base 10 Activities.

0-50.

## Fluency.

			
26			
			

## Problem solving.

Remember it will help to draw your numbers in Base 10 when solving these problems.

### Number Detectives


1. Sanjay's number has three tens and fives ones. What number does Sanjay have?

Isabelle's number has two tens more than Sanjay's number. What number does Isabelle have?



### Number Detectives

5. Faith has 27 ones and Jessica has two tens and 9 ones.



Who has the largest number?  
Explain your answer.

## Number Detectives

2. Alex says...

My number has four tens.



Which numbers could it be? Give three examples.

Which numbers can't it be? Give three examples.