








## Capacity Challenge Questions.

1.

If



Circle whether the glasses or bottles hold more in each row:

A		
B		
C		


2. \_\_\_\_\_

Milly measures the capacity of the bottle.  
She says the bottle has a capacity of  
four cups. Do you agree?



3.

Colour in the bottles to show:



- A has more volume than B but less than C.
- C has the same volume as D.

*Can you find out what the standard units of measure for measuring liquids are?*

*Where might you find them in your house?*