











| | |
|---|---|
| <p>7a. Blake and Li each have £48 to spend.</p> <div data-bbox="236 331 724 456">  <p>I spent $\frac{4}{6}$ of my money.</p> </div> <p>Blake</p> <div data-bbox="261 488 743 595"> <p>I spent $\frac{5}{8}$ of my money.</p>  </div> <p>Li</p> <p>How much money does each child spend?</p> <p>How much do they have left?</p> <div data-bbox="204 734 256 786"> </div> <div data-bbox="762 757 786 779">PS</div> | <p>7b. Ellie and Junior each have £42 to spend.</p> <div data-bbox="847 331 1347 456">  <p>I spent $\frac{6}{7}$ of my money.</p> </div> <p>Ellie</p> <div data-bbox="852 488 1334 595"> <p>I spent $\frac{5}{6}$ of my money.</p>  </div> <p>Junior</p> <p>How much money does each child spend?</p> <p>How much do they have left?</p> <div data-bbox="804 734 857 786"> </div> <div data-bbox="1361 757 1385 779">PS</div> |
| <p>8a. Hamza has 45 balloons.</p> <div data-bbox="373 869 596 1093">  </div> <p>He gives $\frac{5}{9}$ to his cousin and $\frac{2}{5}$ to his friend.</p> <p>How many does he have left?</p> <div data-bbox="204 1279 256 1330"> </div> <div data-bbox="762 1301 786 1323">PS</div> | <p>8b. Natalia has 66 dinosaur toys.</p> <div data-bbox="884 853 1315 1070">  </div> <p>She gives $\frac{6}{11}$ to her brother and $\frac{2}{6}$ to her sister.</p> <p>How many does she have left?</p> <div data-bbox="804 1279 857 1330"> </div> <div data-bbox="1361 1301 1385 1323">PS</div> |
| <p>9a. Oliver and Grace are calculating fractions of an amount.</p> <div data-bbox="229 1429 772 1514" style="border: 2px solid red; padding: 5px;"> <p>Out of 132 colouring pens, five twelfths are sold. How many are left?</p> </div> <div data-bbox="220 1525 708 1637">  <p>There will be 55 left.</p> </div> <p>Oliver</p> <div data-bbox="300 1659 783 1767"> <p>There will be 77 left.</p>  </div> <p>Grace</p> <p>Who is correct? Explain how you know.</p> <div data-bbox="204 1816 256 1868"> </div> <div data-bbox="770 1839 786 1861">R</div> | <p>9b. Anika and Jakub are calculating fractions of an amount.</p> <div data-bbox="810 1429 1353 1514" style="border: 2px solid green; padding: 5px;"> <p>Out of 117 biscuits, seven ninths are sold. How many are left?</p> </div> <div data-bbox="810 1525 1294 1637">  <p>There will be 26 left.</p> </div> <p>Anika</p> <div data-bbox="879 1659 1362 1767"> <p>There will be 91 left.</p>  </div> <p>Jakub</p> <p>Who is correct? Explain how you know.</p> <div data-bbox="804 1816 857 1868"> </div> <div data-bbox="1369 1839 1385 1861">R</div> |