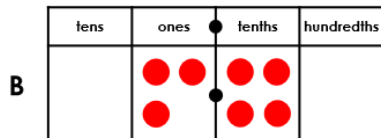
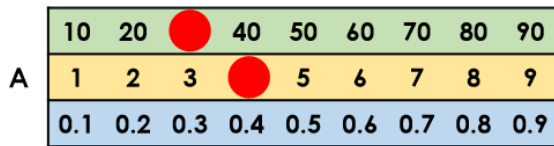


4a. Use your knowledge of dividing 2-digits by 10 to find the odd one out.



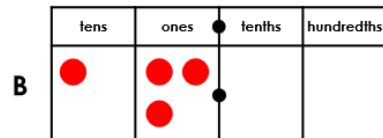
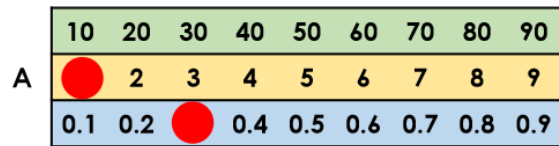
C 4.3

Explain your reasoning.



R

4b. Use your knowledge of dividing 2-digits by 10 to find the odd one out.



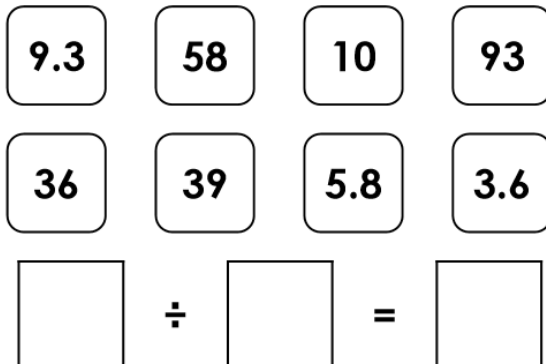
C 3.1

Explain your reasoning.



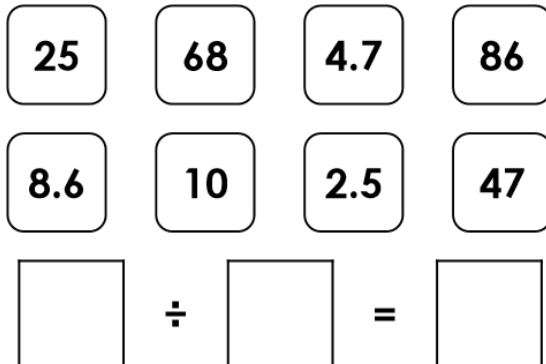
R

5a. Use the cards to complete the number sentence. Find 3 possibilities.



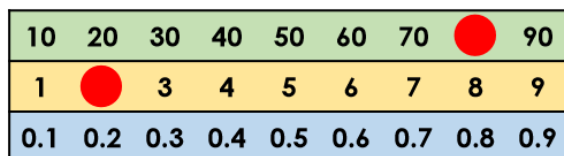
PS

5b. Use the cards to complete the number sentence. Find 3 possibilities.



PS

6a. Callie has divided 71 by 10 on the Gattegno chart below.

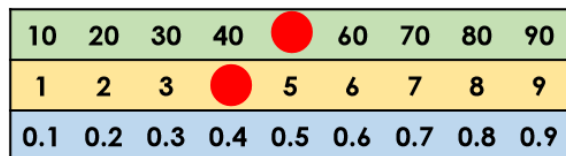


Is she correct? Convince me.



R

6b. Fletcher has divided 54 by 10 on the Gattegno chart below.



Is he correct? Convince me.



R