



Easter Bunny Measurement

I can measure and record length in centimetres.
Measure the height of each Easter Bunny and record the length.

A. _____ cm




B. _____ cm



C. _____ cm




D. _____ cm



E. _____ cm



F. _____ cm



Order the Easter Bunnies from shortest to tallest.
