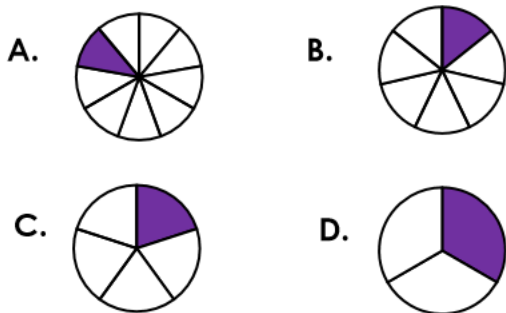


4a. David has put these fractions in order from largest to smallest. Is he correct?

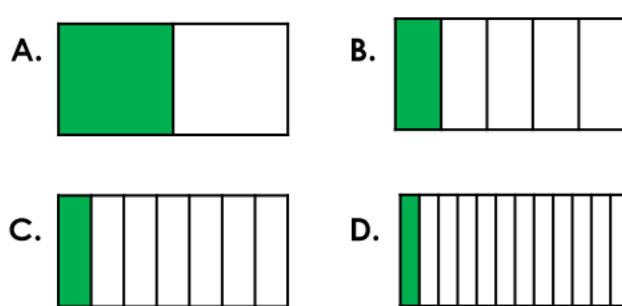


Explain your answer.



R

4b. Rita has put these fractions in order from smallest to largest. Is she correct?

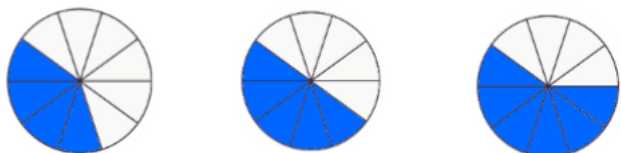


Explain your answer.

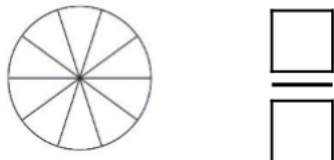


R

5a. Use the images to help you complete the sequence.



Colour and write the next fraction in the sequence.



PS

5b. Use the images to help you complete the sequence.

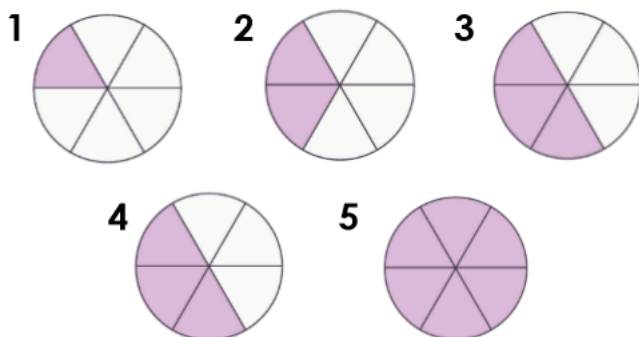


Colour and write the next fraction in the sequence.



PS

6a. Which is the incorrect fraction in this sequence?

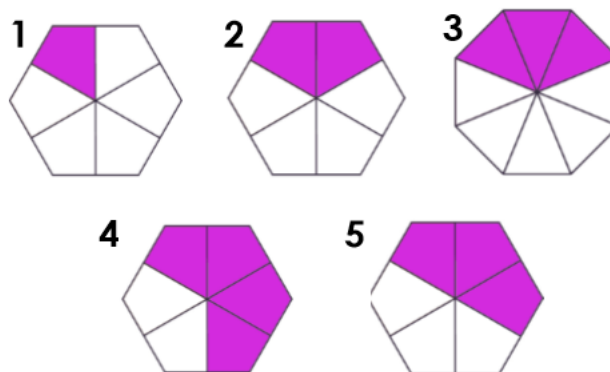


Explain your answer.



R

6b. Which is the incorrect fraction in this sequence?



Explain your answer.



R