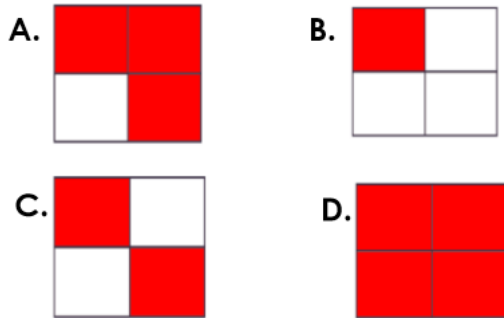


1a. Stuart has put these fractions in order from smallest to largest. Is he correct?

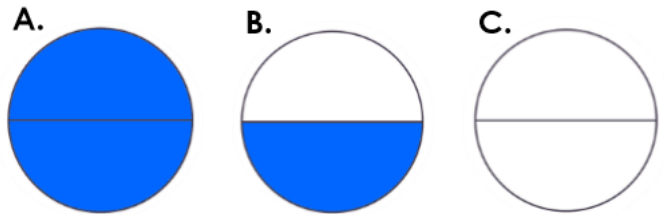


Explain your answer.



R

1b. Habib has put these fractions in order from smallest to largest. Is he correct?

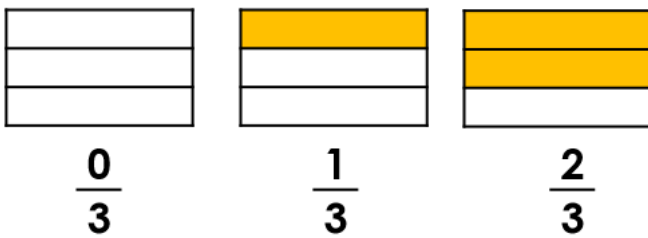


Explain your answer.

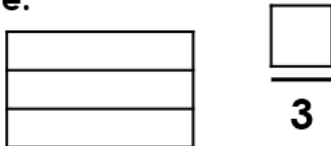


R

2a. Use the images to help you complete the sequence.

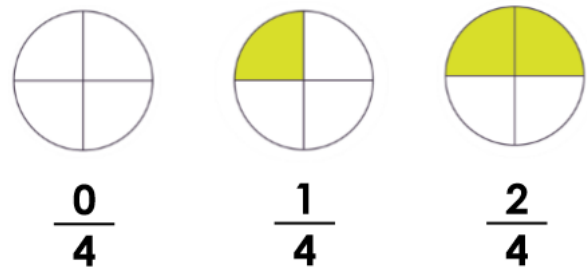


Colour and write the next fraction in the sequence.



PS

2b. Use the images to help you complete the sequence.

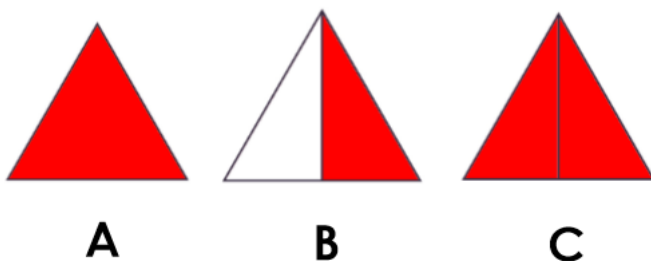


Colour and write the next fraction in the sequence.



PS

3a. Which is the incorrect fraction in this sequence?

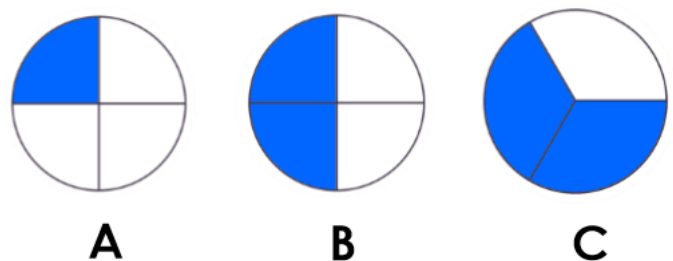


Explain your answer.



R

3b. Which is the incorrect fraction in this sequence?



Explain your answer.



R