


O'clock and Half Past


5a. Write the time shown on this clock.



VF


O'clock and Half Past

5b. Write the time shown on this clock.



VF

6a. Draw the missing hands on the clock so that it shows the correct time written beneath it.




Half past 1



VF

6b. Draw the missing hands on the clock so that it shows the correct time written beneath it.



6 o'clock



VF

7a. Draw a line to match the clocks to the correct written time.



Half past 6



6 o'clock

Half past 12



VF

7b. Draw a line to match the clocks to the correct written time.



Half past 9




9 o'clock

9 past 6



VF


8a. Match the times to the things you might do at that time.



Eat lunch

Eat breakfast

Start school



VF

8b. Match the times to the things you might do at that time.



Have dinner

Eat lunch

Go to school



VF