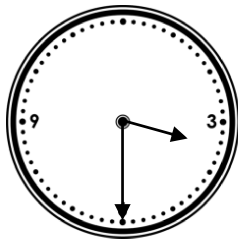


O'clock and Half Past

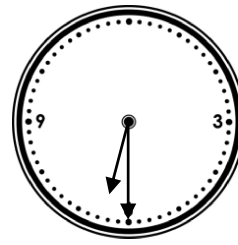
9a. Write the time shown on this clock.



VF

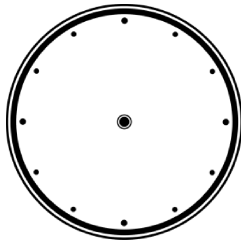
O'clock and Half Past

9b. Write the time shown on this clock.



VF

10a. Draw the missing hands on the clock so that it shows the correct time written beneath it.

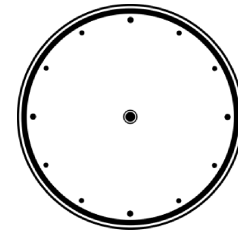


Half past 12



VF

10b. Draw the missing hands on the clock so that it shows the correct time written beneath it.

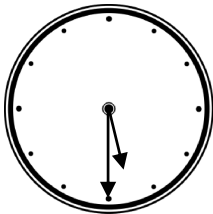


3 o'clock



VF

11a. Draw a line to match the clock to the correct written time.



Half past 6

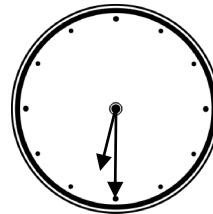
6 o'clock

Half past 5



VF

11b. Draw a line to match the clock to the correct written time.



Half past 6

6 o'clock

Half past 5





VF

12a. Match the words to the clocks.

Going to school

Having lunch

3 o'clock




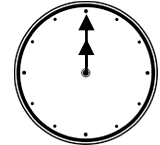

VF

12b. Match the words to the clocks.

Breakfast

Lunch

Half past 5



VF