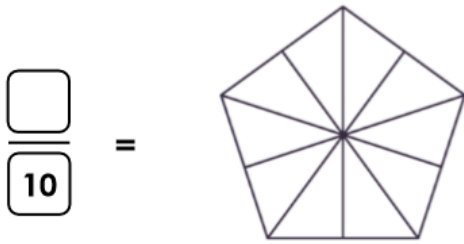
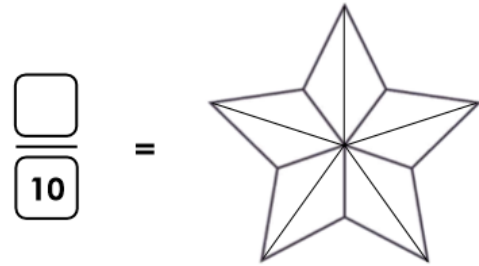


9a. Shade the correct number of parts and write the fraction to show three tenths.



VF

9b. Shade the correct number of parts and write the fraction to show five tenths.



VF

10a. There are 10 pets in a pen.
Some are dogs and some are cats.
Two tenths of them are cats.
What fraction of pets are dogs?



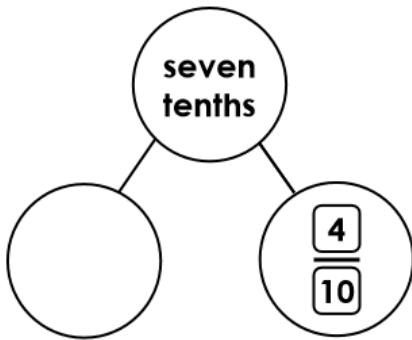
VF

10b. There are 10 pencils in a pot.
Some are red and some are blue.
Four tenths of them are red.
What fraction of pencils are blue?



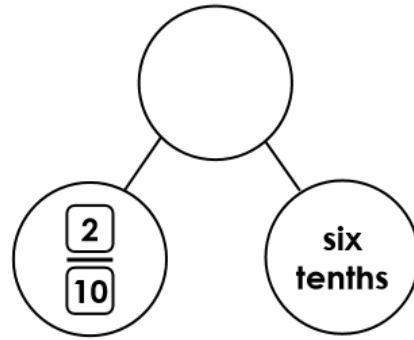
VF

11a. Complete the part-whole model.



VF

11b. Complete the part-whole model.



VF

12a. Match the images and words to the correct fraction.



VF

12b. Match the images and words to the correct fraction.



VF