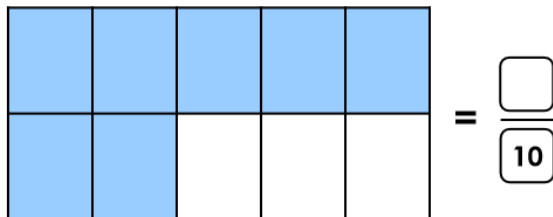
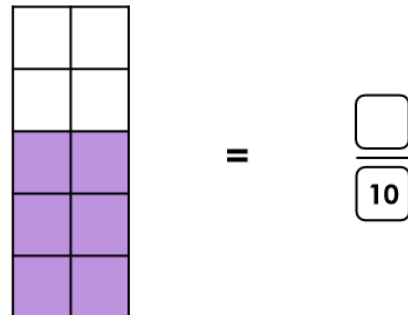


1a. How many tenths are shaded? Write the answer as a fraction.




VF

1b. How many tenths are shaded? Write the answer as a fraction.



VF

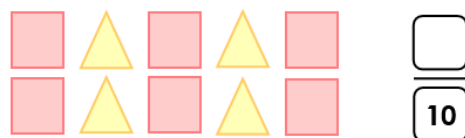
2a. There are ten magnets on a fridge. Two of them are round.



Write this number as a fraction.

VF

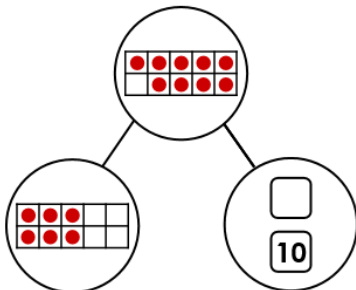
2b. There are ten shapes in a box. Four of them are triangles.



Write this number as a fraction.

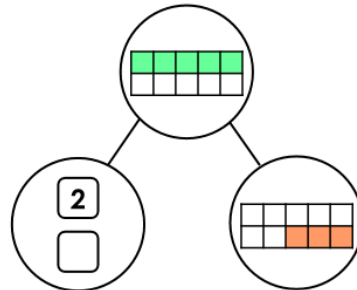
VF

3a. Complete the part-whole model.



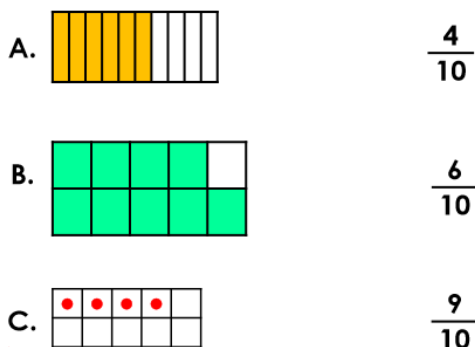
VF

3b. Complete the part-whole model.



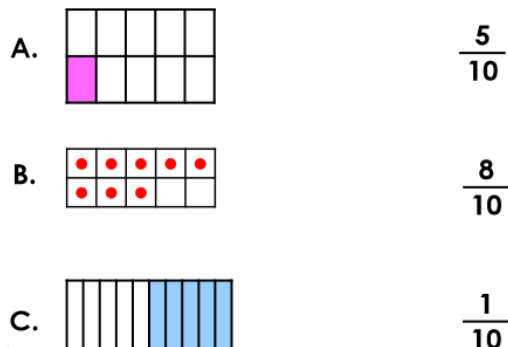
VF

4a. Match the images to the fractions.



VF

4b. Match the images to the fractions.



VF