

Describe turns - harder.

9a. Look at the faces below. How have they moved?

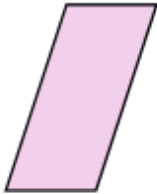
Before	After	Turn

Write the correct turn for each face.




VF

10a. Draw this shape after a half turn.



VF

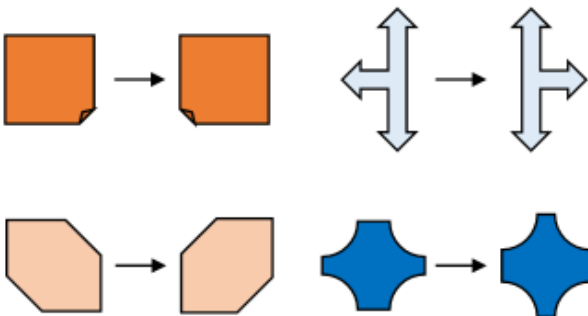
11a. Describe the turn each image has made (there may be more than one answer).



*Hint: turn in both directions*

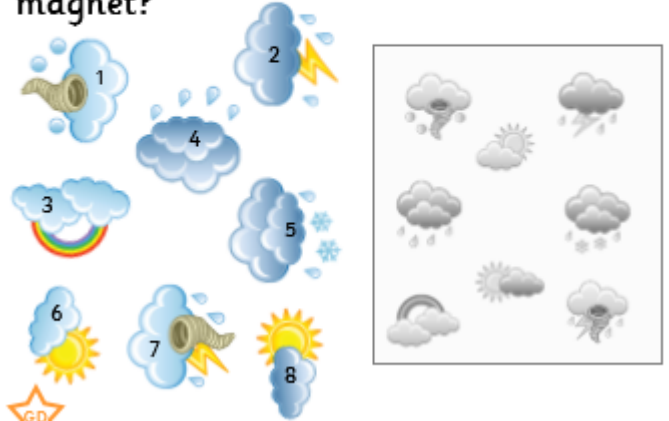
VF

12a. Circle the shapes which have made the same turn, which turn is it?



VF

8b. The weather presenter needs to match the magnets to their correct place. Which way should she turn each magnet?



PS