


Year 1 Subtraction Fluency - medium.

Subtraction – Not Crossing 10

Subtraction – Not Crossing 10

5a. Draw a picture to finish the story and write a calculation to match.



There were 12 carrots.

2 are eaten.


How many are left?

$$\square - \square = \square$$



VF

5b. Draw a picture to finish the story and write a calculation to match.



There were 15 leaves on a tree.

4 fell off.

How many are left?

$$\square - \square = \square$$



VF

6a. True or false?

$$17 - 0 > 18 - 2$$



VF

6b. True or false?

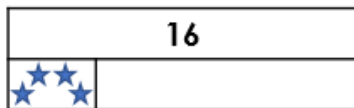
$$15 - 3 < 12 - 0$$



VF

7a. Complete the bar model using the story below.

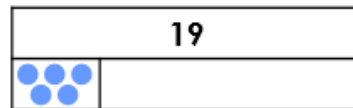
Stan has 16 stars.
4 stars are red.
The rest are blue.



VF

7b. Complete the bar model using the story below.

May has 19 counters.
5 counters are green.
The rest are blue.



VF

8a. Complete the calculation using the number line below.

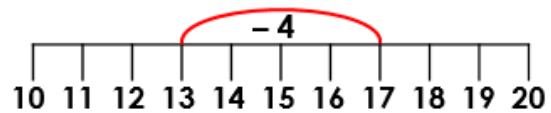


$$\square - \square = \square$$



VF

8b. Complete the calculation using the number line below.



$$\square - \square = \square$$



VF