

Name

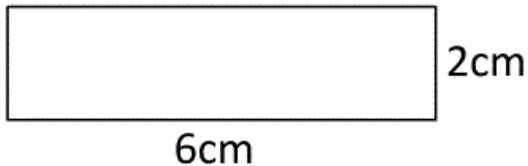
Date

## AREA AND PERIMETER SHEET 2

Work out the area and perimeter of the following rectangles.

They are not to scale. Remember - **area inside** and **perimeter outside**.

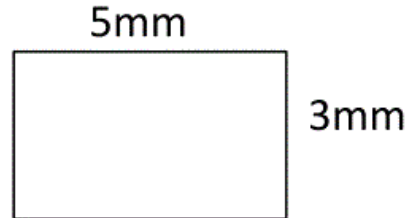
1)



Area = \_\_\_\_\_ square cm

Perimeter = \_\_\_\_\_ cm

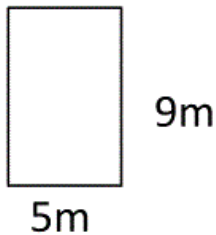
2)



Area = \_\_\_\_\_ square mm

Perimeter = \_\_\_\_\_ mm

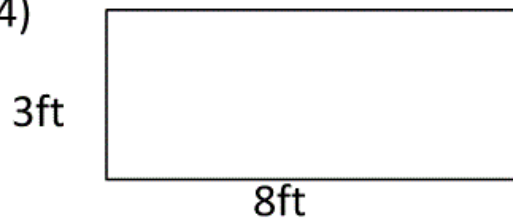
3)



Area = \_\_\_\_\_ square m

Perimeter = \_\_\_\_\_ m

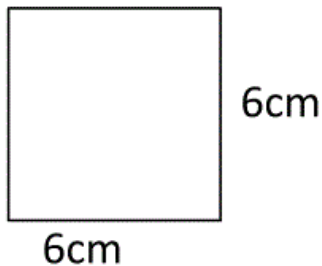
4)



Area = \_\_\_\_\_ square ft

Perimeter = \_\_\_\_\_ ft

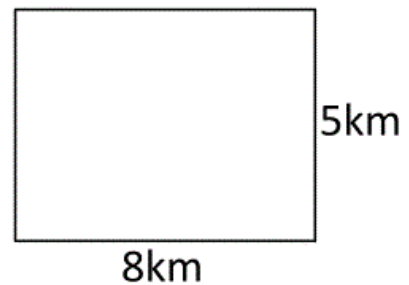
5)



Area = \_\_\_\_\_ square cm

Perimeter = \_\_\_\_\_ cm

6)



Area = \_\_\_\_\_ square km

Perimeter = \_\_\_\_\_ km