

Year 1 – Add by Making Ten Fluency – medium.

Add by Making 10

9a. Complete the calculation and ten frame below.

$$4 + \text{nine} = \square$$



VF

Add by Making 10

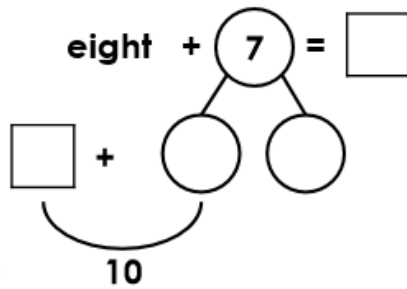
9b. Complete the calculation and ten frame below.

$$5 + \text{six} = \square$$



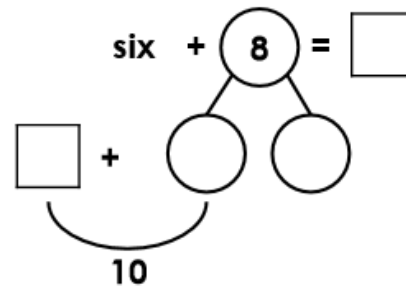
VF

10a. Use the part-whole model to solve this calculation.



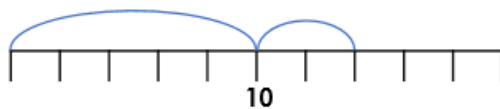
VF

10b. Use the part-whole model to solve this calculation.



VF

11a. Tick the calculation that matches the number line.

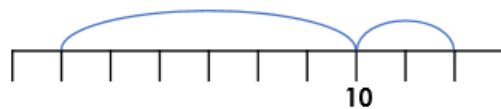


$0 + 7 = \square$ $5 + 7 = \square$



VF

11b. Tick the calculation that matches the number line.



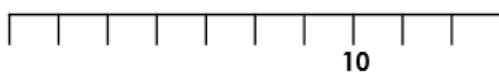
$4 + 8 = \square$ $2 + 8 = \square$



VF

12a. Complete the number line to show the calculation.

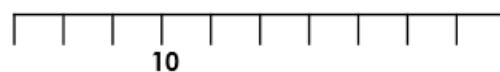
$$3 + 8 = \square$$



VF

12b. Complete the number line to show the calculation.

$$7 + 9 = \square$$



VF