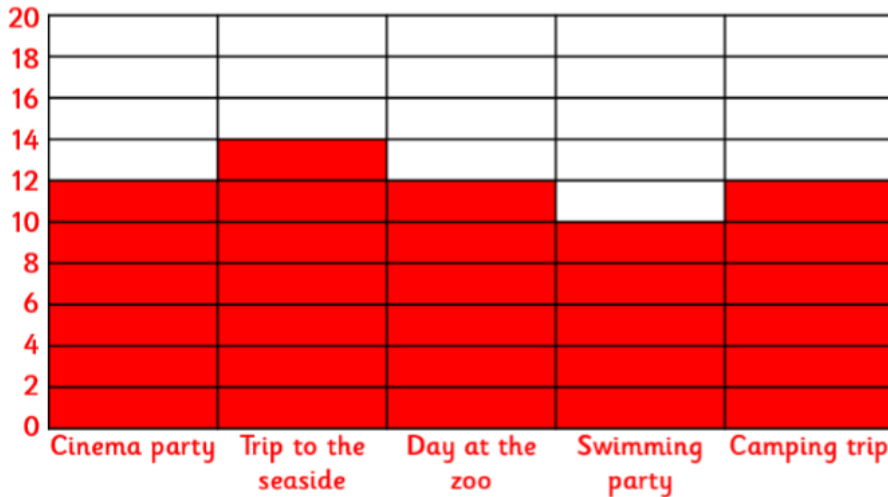


1. Ms Hawkin's class chose a day at the zoo, and Mr Jiang's class chose a camping trip.

Accept any reasonable answer for the potential prize.

2. Year 3 Attendance Reward Votes































Based on the number of votes, the prize is a trip to the seaside.

3. 60 students were surveyed.

Victoria has used one sun to represent every set of 5, but has left off the single votes from each section.

4.

Activity	Votes  = 2
Sandcastle Competition	       
Swimming	    
Penny Arcade	      
Donkey rides	      
Kite Flying	