

Year 1. Counting on fluency - medium.

**Add by Counting On**

**Add by Counting On**

5a. True or false?

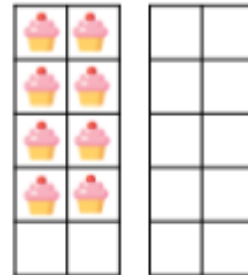


There are 9 fish in a bowl.  
6 more are added.  
Now there are 13 fish.



VF

5b. True or false?




There are 8 buns in a box.  
4 more are added.  
Now there are 13 buns.



VF

6a. Use the number line to complete the number sentence.


$$15 + 4 = \square$$



VF


6b. Use the number line to complete the number sentence.

$$13 + 4 = \square$$



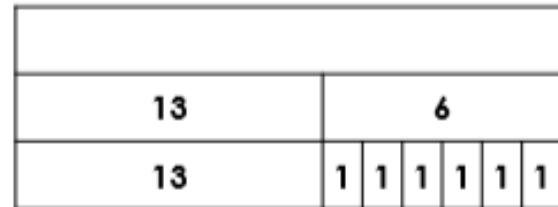
VF

7a. Complete the bar model by counting on.



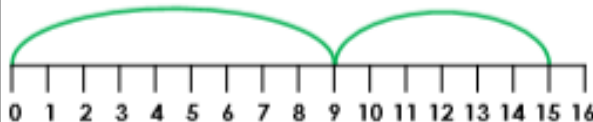
VF

7b. Complete the bar model by counting on.



VF

8a. Circle the number sentence shown on the number line and write the answer.



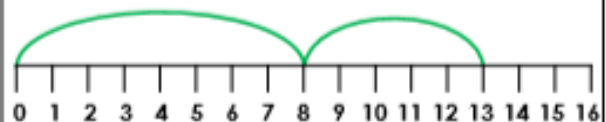
$$6 + 9 = \square \quad 10 + 5 = \square$$

$$9 + 5 = \square \quad 9 + 6 = \square$$



VF

8b. Circle the number sentence shown on the number line and write the answer.



$$8 + 8 = \square \quad 7 + 5 = \square$$

$$8 + 5 = \square \quad 0 + 8 = \square$$



VF