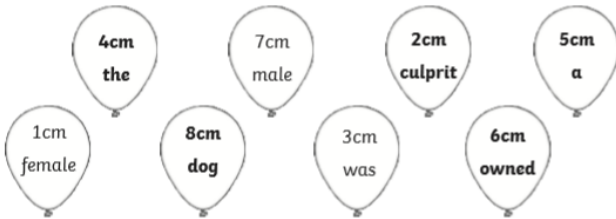
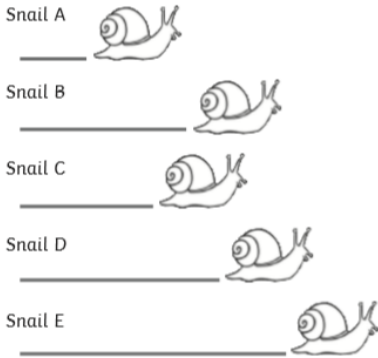


## Clue 1: Snail Trail Answers

At the carnival, there was a snail race. Measure the distances the snails moved, using a ruler.

Colour in the correct answers. Then put the words into a sentence to solve the first clue.



Answer to Clue 1:

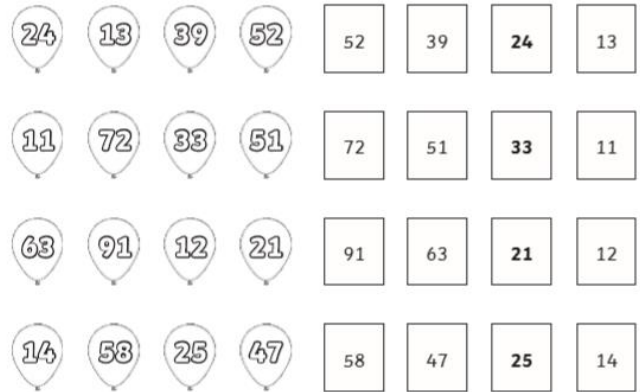
**The culprit owned a dog.**

## Clue 2: Balloon Pop! Answers

Roll up! Roll up! See if you can order these numbers from the largest to the smallest.

Write the numbers on the balloons in the boxes in order from high to low.

Find the third number in each set in the table below to solve clue 2.



24 the	63 burger	12 short
72 pizza	33 culprit	21 was
25 tall	52 ComCo	47 Telephone

Answer to Clue 2:

**The culprit was tall.**

## Clue 3: Patsy, the Maths Dog Answers

Mr and Mrs West own a dog called Patsy. They have brought Patsy to the carnival because they believe she can work out different calculations. She barks when she thinks an answer is right.

Is she always right, though?

Here are the calculations which Patsy thought were correct. Check if she is right. Work out the answers and tick true or false.



	True	False
$10 + 15 = 25$	✓	
$6 \times 2 = 18$		✓
$51 - 10 = 31$		✓
$5 \times 7 = 35$	✓	
$23 + 16 = 36$		✓
$9 \times 10 = 90$	✓	
$8 + 43 = 52$		✓
$4 \times 5 = 25$		✓

If there are more false answers than true ones, the culprit is female.

If there are more true answers than false ones, the culprit is male.

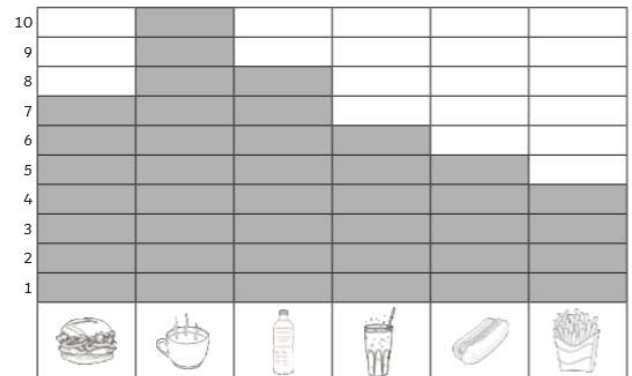
Answer to Clue 3:

**The culprit is female.**

## Clue 4: Refreshment Tent Answers

The amount of food and drink sold in the first 15 minutes of the carnival was recorded.

Count the food and drink and record the information in a bar chart.



#### Clue 4: Refreshment Tent

- How many of the most popular items were sold?  
**10**
- How many of the most least items were sold?  
**4**
- How many portions of chips and burgers were sold altogether?  
**11**
- How many bottles of water and cups of tea were sold altogether?  
**18**
- How many more bottles of coke were sold compared to hot dogs?  
**1**
- What is the difference between the number of coke bottles sold and the number of chips sold?  
**2**
- How many burgers and cups of tea were sold altogether?  
**17**
- How much food was sold altogether?  
**16**

Colour in the correct answers. Then put the words into a sentence to solve the clue.

<b>17</b> the	6 burgers	12 chips	<b>1</b> released
13 coke	<b>10</b> person	<b>18</b> likes	<b>2</b> balloons
<b>4</b> the	<b>16</b> pizza	<b>11</b> who	20 hotdogs

Answer to Clue 4:

**The person who released the balloons likes pizza.**

#### Clue 5: Ice Cream Totals Answers

Aha! Evidence has been discovered! A mobile phone was found near the place where the balloons were being kept.

Ice creams cost £1 and 36p each.

Work out which child has exactly the right amount of money to buy an ice cream. Then, use the table below to find out which type of mobile phone was found beside the balloons.


**Natalia (£1 and 40p)**



**Harry (£1 and 36p)**



**Anya (£1 and 37p)**



**Jai (£1 and 37p)**



#### Clue 5: Ice Cream Totals

Anya found a Uphone mobile phone.
<b>Harry found a Halo mobile phone.</b>
Jai found a Telephon mobile phone.
Natalia found a Comco mobile phone.

Answer to Clue 5:

**A Halo mobile phone was found beside the balloons.**

Have you solved the mystery at the Little Hallow Carnival?

Who released the balloons?

**Jess**