

Year 1 – Fact families – easier

Related Facts

Related Facts

1a. Tick the calculation that is not related to the images.



- A. $12 + 7 = 19$
- B. $7 + 8 = 15$
- C. $19 - 7 = 12$
- D. $19 - 12 = 7$



VF

1b. Tick the calculation that is not related to the images.

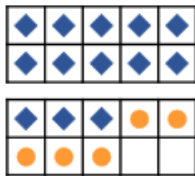


- A. $5 + 6 = 11$
- B. $6 + 5 = 11$
- C. $11 - 6 = 5$
- D. $14 - 12 = 2$



VF

2a. Use the ten frames to complete the related fact.




$$\square + \square = \square$$

$$18 - 5 = 13$$



VF

2b. Use the ten frames to complete the related fact.




$$4 + 12 = 16$$

$$\square - \square = \square$$



VF

3a. Complete the calculation to match the bar model.



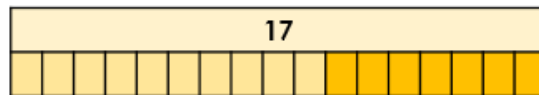
$$4 + 9 = 13$$

$$\square - \square = \square$$



VF

3b. Complete the calculation to match the bar model.



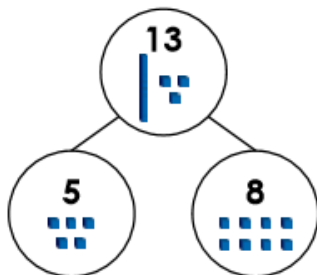
$$\square + \square = \square$$

$$17 - 7 = 10$$



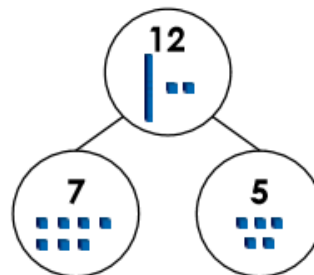
VF

4a. Write four calculations to match the part-whole model.



VF

4b. Write four calculations to match the part-whole model.



VF