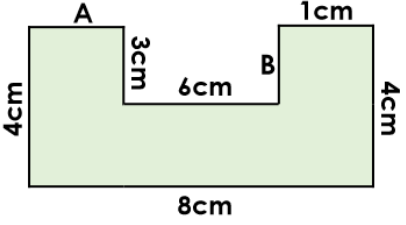
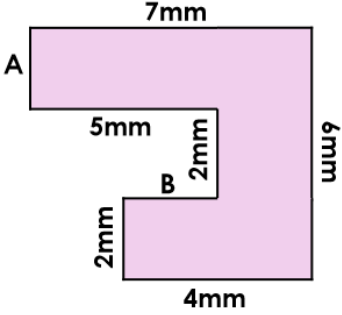
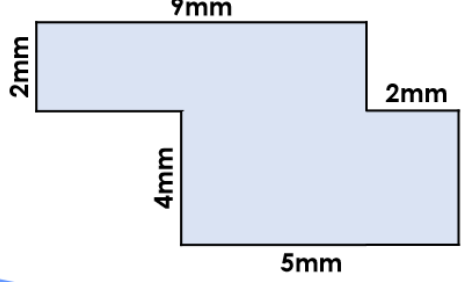
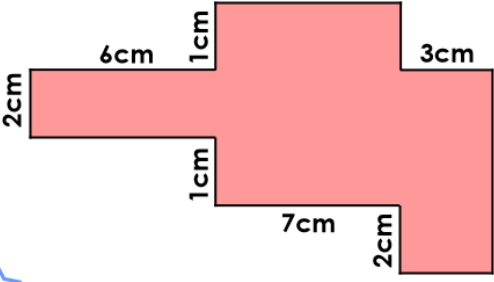
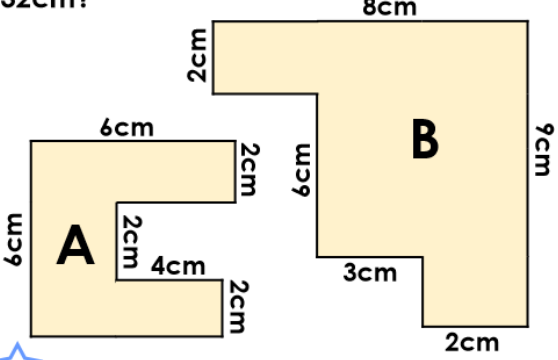
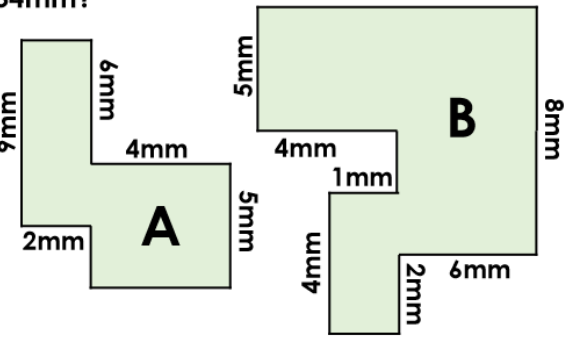


<p>5a. Find the missing measurements and calculate the perimeter.</p>  <p style="text-align: center;">Not to scale</p>	<p>5b. Find the missing measurements and calculate the perimeter.</p>  <p style="text-align: center;">Not to scale</p>
<p>6a. True or false? The perimeter of the shape is 22mm.</p>  <p style="text-align: center;">Not to scale</p>	<p>6b. True or false? The perimeter of the shape is 46cm.</p>  <p style="text-align: center;">Not to scale</p>
<p>7a. Which shape has a perimeter of 32cm?</p>  <p style="text-align: center;">Not to scale</p>	<p>7b. Which shape has a perimeter of 34mm?</p>  <p style="text-align: center;">Not to scale</p>
<p>8a. Draw a compound rectilinear shape with a perimeter of 18cm.</p>	<p>8b. Draw a compound rectilinear shape with a perimeter of 24cm.</p>