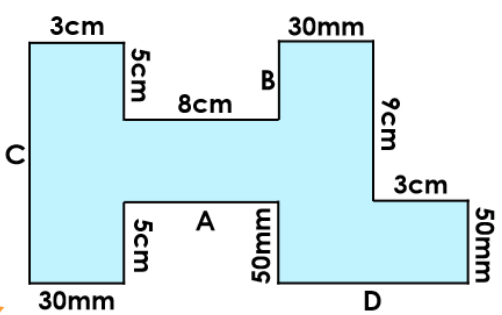
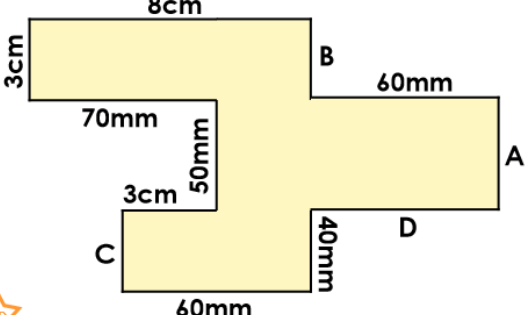
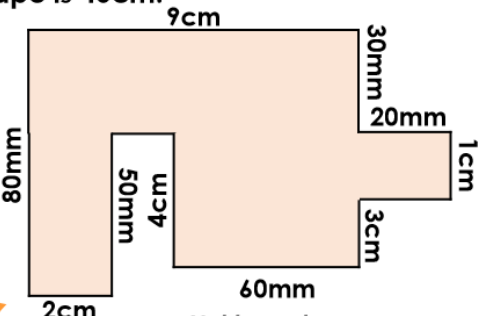
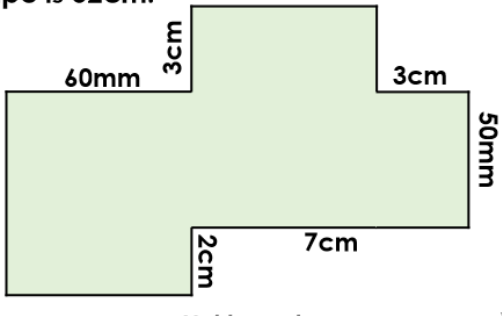
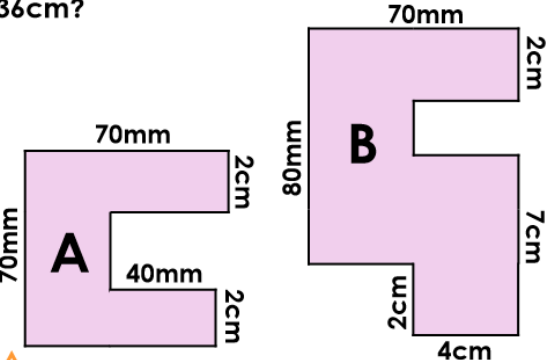
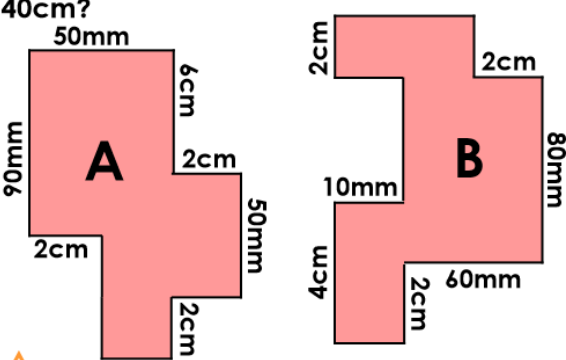


<p>9a. Find the missing measurements and calculate the perimeter.</p>  <p>GD Not to scale VF</p>	<p>9b. Find the missing measurements and calculate the perimeter.</p>  <p>GD Not to scale VF</p>
<p>10a. True or false? The perimeter of the shape is 46cm.</p>  <p>GD Not to scale VF</p>	<p>10b. True or false? The perimeter of the shape is 52cm.</p>  <p>GD Not to scale VF</p>
<p>11a. Which shape has a perimeter of 36cm?</p>  <p>GD Not to scale VF</p>	<p>11b. Which shape has a perimeter of 40cm?</p>  <p>GD Not to scale VF</p>
<p>12a. Draw a compound rectilinear shape with a perimeter of 30cm which has 8 sides.</p> <p>GD VF</p>	<p>12b. Draw a compound rectilinear shape with a perimeter of 22cm which has 10 sides.</p> <p>GD VF</p>