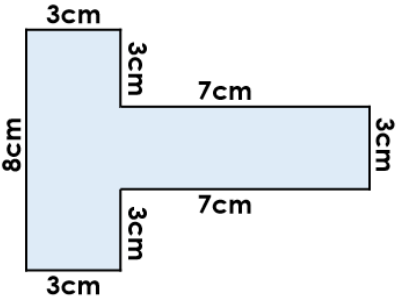
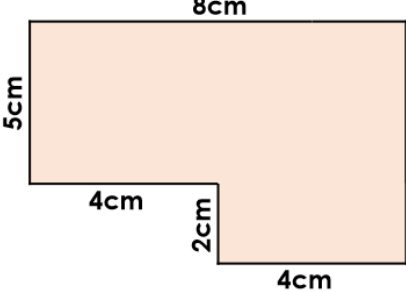
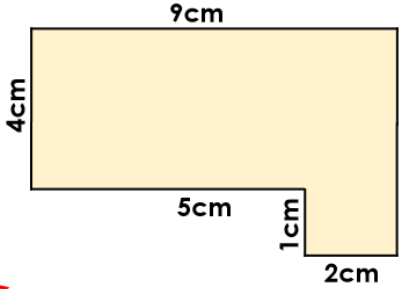
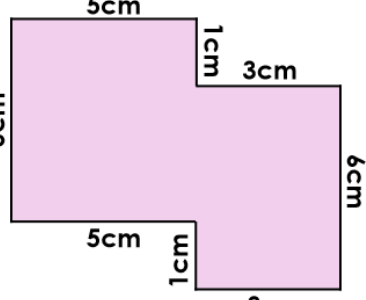
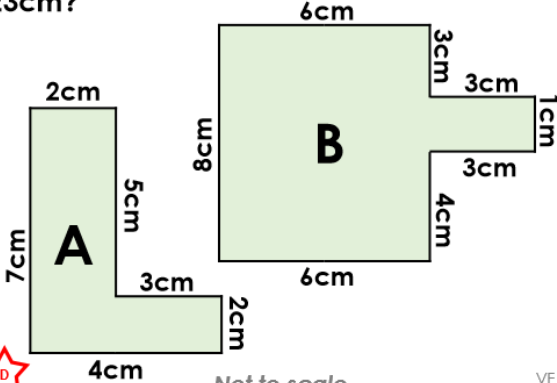
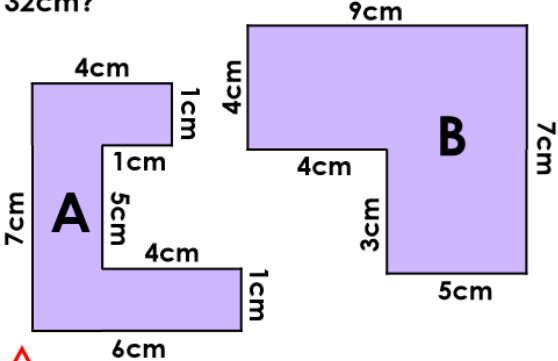
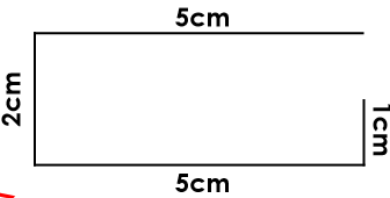


<p>1a. Calculate the perimeter.</p>  <p>Not to scale</p>	<p>1b. Calculate the perimeter.</p>  <p>Not to scale</p>
<p>2a. True or false? The perimeter of the shape is 28cm.</p>  <p>Not to scale</p>	<p>2b. True or false? The perimeter of the shape is 30cm.</p>  <p>Not to scale</p>
<p>3a. Which shape has a perimeter of 23cm?</p>  <p>Not to scale</p>	<p>3b. Which shape has a perimeter of 32cm?</p>  <p>Not to scale</p>
<p>4a. Complete the rectilinear shape so that it has a perimeter of 20cm.</p> 	<p>4b. Complete the rectilinear shape so that it has a perimeter of 18cm.</p> 