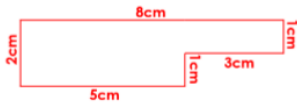


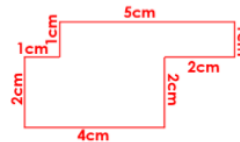
Mrs. Gregory & Mrs. Postlethwaite's group – Fluency answers

Bronze

- 1a. **37cm**
- 2a. **False, the perimeter is 26cm.**
- 3a. **A**
- 4a. **Any completed rectilinear shape with a perimeter of 20cm, for example:**

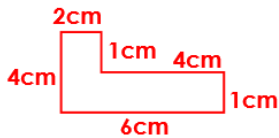


- 1b. **30cm**
- 2b. **True**
- 3b. **B**
- 4b. **Any completed rectilinear shape with a perimeter of 18cm, for example:**

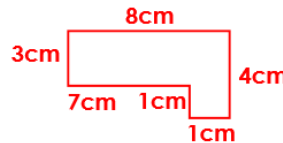


Silver

- 5a. **A = 1cm, B = 3cm; 30cm perimeter**
- 6a. **False; the perimeter is 34mm.**
- 7a. **A**
- 8a. **Any compound rectilinear shape with a perimeter of 18cm, for example:**

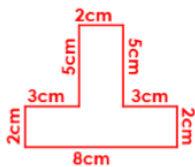


- 5b. **A = 2mm, B = 2mm; perimeter of 30mm**
- 6b. **False; the perimeter is 44cm.**
- 7b. **A**
- 8b. **Any rectilinear shape with a perimeter of 24cm, for example:**



Gold

- 9a. **A = 8cm, B = 5cm, C = 14cm, D = 6cm; 82cm (820mm) perimeter.**
- 10a. **True**
- 11a. **A**
- 12a. **Any compound rectilinear shape with a perimeter of 30cm and 8 sides, for example:**



- 9b. **A = 5cm, B = 3cm, C = 4cm, D = 6cm; 60cm (600mm) perimeter.**
- 10b. **False, the perimeter is 46cm.**
- 11b. **A and B**
- 12b. **Any compound rectilinear shape with a perimeter of 22cm and 10 sides, for example:**

