

4a. Holly and Matt have saved some money.



I have £3 and 70p.




I have £8 and 55p.

How much more money does Matt have than Holly? Explain how you know.



R

4b. Kate and Sam have saved some money.



I have £6 and 95p.



I have £5 and 55p.

How much more money does Kate have than Sam? Explain how you know.

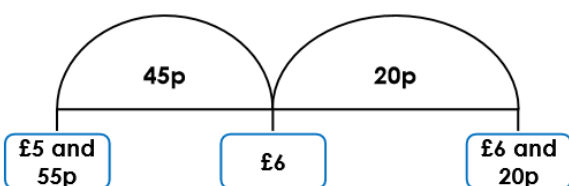


R

5a. Harry says,



I have £6 and 20p and I spend 55p on sweets. This means I will have £5 and 55p left.



Explain the mistake that Harry has made.

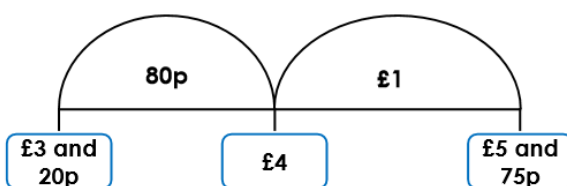


R

5b. Pam says,



I have £5 and 75p and I spend £1 and 80p on a sandwich. This means I will have £3 and 20p left.



Explain the mistake that Pam has made.



R

6a. Find possible values of the hidden digits. Complete the subtraction using 4 of the cards below. Find 2 possible solutions.



£  and  5p – £  and  0p = £3 and 45p



PS

6b. Find possible values of the hidden digits. Complete the subtraction using 4 of the cards below. Find 2 possible solutions.



£  and  5p – £  and  0p = £4 and 25p



PS