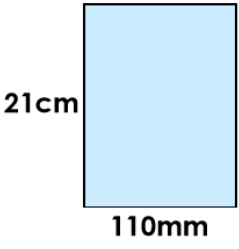

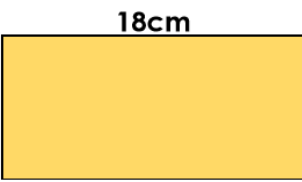

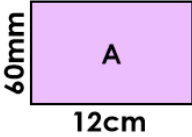
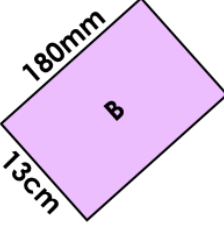
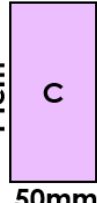


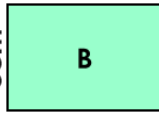
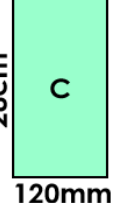









<p>9a. Circle the perimeter of the rectangle.</p>  <div style="display: flex; justify-content: space-around; margin-top: 10px;"> <div style="border: 1px solid black; border-radius: 10px; padding: 5px 15px;">62cm</div> <div style="border: 1px solid black; border-radius: 10px; padding: 5px 15px;">64cm</div> <div style="border: 1px solid black; border-radius: 10px; padding: 5px 15px;">66cm</div> </div> <div style="display: flex; justify-content: space-between; align-items: center; margin-top: 10px;"> <span></span> <span>not to scale</span> <span>VF</span> </div>	<p>9b. Circle the perimeter of the rectangle.</p>  <div style="display: flex; justify-content: space-around; margin-top: 10px;"> <div style="border: 1px solid black; border-radius: 10px; padding: 5px 15px;">62cm</div> <div style="border: 1px solid black; border-radius: 10px; padding: 5px 15px;">58cm</div> <div style="border: 1px solid black; border-radius: 10px; padding: 5px 15px;">60cm</div> </div> <div style="display: flex; justify-content: space-between; align-items: center; margin-top: 10px;"> <span></span> <span>not to scale</span> <span>VF</span> </div>
<p>10a. Match the rectangle to the correct perimeter.</p> <div style="display: flex; align-items: center; justify-content: space-around;"> <div style="text-align: center;">  <p>A</p> </div> <div style="text-align: center;">  <p>B</p> </div> <div style="text-align: center;">  <p>C</p> </div> </div> <div style="display: flex; justify-content: space-around; margin-top: 10px;"> <div style="border: 1px solid black; border-radius: 10px; padding: 5px 15px;">38cm</div> <div style="border: 1px solid black; border-radius: 10px; padding: 5px 15px;">62cm</div> <div style="border: 1px solid black; border-radius: 10px; padding: 5px 15px;">36cm</div> </div> <div style="display: flex; justify-content: space-between; align-items: center; margin-top: 10px;"> <span></span> <span>not to scale</span> <span>VF</span> </div>	<p>10b. Match the rectangle to the correct perimeter.</p> <div style="display: flex; align-items: center; justify-content: space-around;"> <div style="text-align: center;">  <p>A</p> </div> <div style="text-align: center;">  <p>B</p> </div> <div style="text-align: center;">  <p>C</p> </div> </div> <div style="display: flex; justify-content: space-around; margin-top: 10px;"> <div style="border: 1px solid black; border-radius: 10px; padding: 5px 15px;">42cm</div> <div style="border: 1px solid black; border-radius: 10px; padding: 5px 15px;">58cm</div> <div style="border: 1px solid black; border-radius: 10px; padding: 5px 15px;">80cm</div> </div> <div style="display: flex; justify-content: space-between; align-items: center; margin-top: 10px;"> <span></span> <span>not to scale</span> <span>VF</span> </div>
<p>11a. The perimeter of this rectangle is 76cm. Calculate the missing sides.</p>  <div style="display: flex; justify-content: space-between; align-items: center; margin-top: 10px;"> <span></span> <span>not to scale</span> <span>VF</span> </div>	<p>11b. The perimeter of this rectangle is 82cm. Calculate the missing sides.</p>  <div style="display: flex; justify-content: space-between; align-items: center; margin-top: 10px;"> <span></span> <span>not to scale</span> <span>VF</span> </div>
<p>12a. Choose two measurements which will make a rectangle with a perimeter of 540mm.</p> <div style="display: grid; grid-template-columns: 1fr 1fr; gap: 10px; margin-top: 10px;"> <div style="border: 1px solid black; border-radius: 10px; padding: 5px 15px;">25cm</div> <div style="border: 1px solid black; border-radius: 10px; padding: 5px 15px;">13cm</div> <div style="border: 1px solid black; border-radius: 10px; padding: 5px 15px;">19cm</div> <div style="border: 1px solid black; border-radius: 10px; padding: 5px 15px;">14cm</div> </div> <div style="display: flex; justify-content: space-between; align-items: center; margin-top: 10px;"> <span></span> <span>VF</span> </div>	<p>12b. Choose two measurements which will make a rectangle with a perimeter of 720mm.</p> <div style="display: grid; grid-template-columns: 1fr 1fr; gap: 10px; margin-top: 10px;"> <div style="border: 1px solid black; border-radius: 10px; padding: 5px 15px;">20cm</div> <div style="border: 1px solid black; border-radius: 10px; padding: 5px 15px;">21cm</div> <div style="border: 1px solid black; border-radius: 10px; padding: 5px 15px;">12cm</div> <div style="border: 1px solid black; border-radius: 10px; padding: 5px 15px;">15cm</div> </div> <div style="display: flex; justify-content: space-between; align-items: center; margin-top: 10px;"> <span></span> <span>VF</span> </div>