


Varied Fluency – Find a Quarter of a Quantity

5a. Complete the statement based on the picture below.

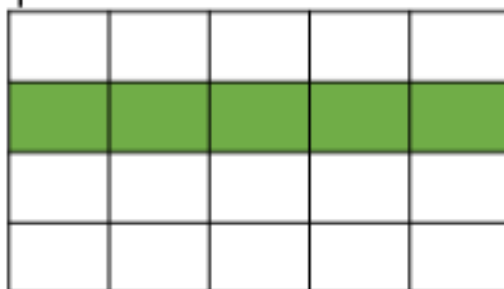


There are _____ gems. One quarter of _____ is _____.



1 VF

5b. Complete the statement based on the picture below.



There are _____ boxes. One quarter of _____ is _____.



1 VF


6a. Use the counters to complete the statement.



One quarter of 12 is _____.

1 VF

6b. Use the counters to complete the statement.



One quarter of 20 is _____.

1 VF

7a. Here is one quarter. What is the total?




1 VF

7b. Here is one quarter. What is the total?




1 VF

8a. Colour one quarter of the triangles.



1 VF

8b. Colour one quarter of the squares.



1 VF