


Varied Fluency – Find a Quarter of a Quantity

1a. Complete the statement based on the picture below.



There are _____ boxes. One quarter of _____ is _____.



1 VF

1b. Complete the statement based on the picture below.



There are _____ gems. One quarter of _____ is _____.



1 VF


2a. Use the counters to complete the statement.



One quarter of 4 is _____.

1 VF

2b. Use the counters to complete the statement.



One quarter of 8 is _____.

1 VF

3a. Here is one quarter. What is the total?



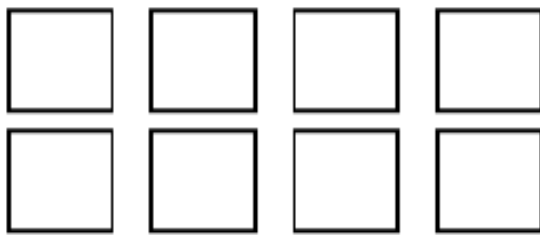
1 VF

3b. Here is Here is one quarter. What is the total?




1 VF

4a. Colour one quarter of the squares.



1 VF

4b. Colour one quarter of the circles.



1 VF