

Sort 3D Shapes

4a. Katie has three 3D shapes.



She says,



I have three cylinders.

Do you agree? Explain your answer.



R

Sort 3D Shapes

4b. Theo has three 3D shapes.



He says,



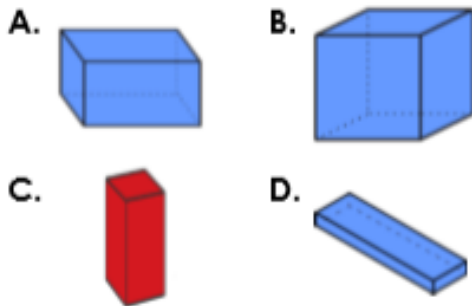
I have three cones.

Do you agree? Explain your answer.



R

5a. Which shape is the odd one out?

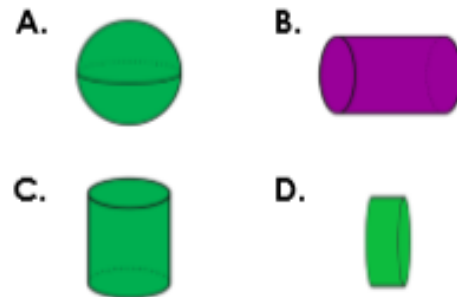


Find 2 possible answers.



PS

5b. Which shape is the odd one out?




Find 2 possible answers.



PS

6a. Zac says,

B is the only shape that isn't a pyramid.



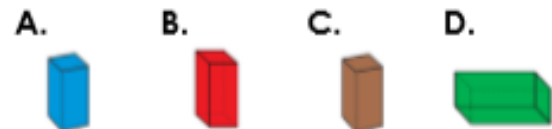
Do you agree? Explain your answer.



R

6b. Mia says,

D is the only shape that isn't a cuboid.



Do you agree? Explain your answer.



R