











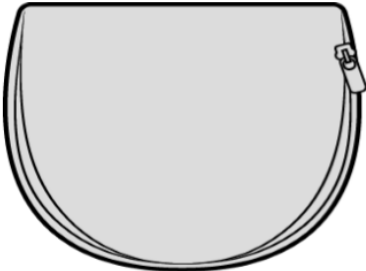



<p>7a. Kyle and Erin both want to buy a basketball. A basketball costs £4.50.</p> <p>Kyle says, "I have three £1 coins, a 20p coin, two 50p coins and three 5p coins."</p> <p>Erin says, "I have two £1 coins less and three 50p coins more than Kyle".</p> <p>Who can afford to buy a basketball? Explain how you know.</p>  <p> R</p>	<p>7b. Jack and Tamina both want to buy a rubber duck. A rubber duck costs £2.80.</p> <p>Tamina says, "I have a £1 coin, seven 20p coins and four 5p coins."</p> <p>Jack says, "I have one more £1 coin and 4 less 20p coins than Tamina."</p> <p>Who can afford to buy a rubber duck? Explain how you know.</p>  <p> R</p>
<p>8a. How much does each child have? Write your answer in pence and in decimals.</p> <div style="display: flex; justify-content: space-between;"> <div style="text-align: center;">  <p>Kevin</p> <p>I have six two pound coins, one fifty pence coin and two ten pence coins.</p> </div> <div style="text-align: center;">  <p>Leah</p> <p>I have a ten pound note, one two pound coin and three twenty pence coins.</p> </div> </div> <p> PS</p>	<p>8b. How much does each child have? Write your answer in pence and in decimals.</p> <div style="display: flex; justify-content: space-between;"> <div style="text-align: center;">  <p>Nell</p> <p>I have a five pound note, four one pound coins and eight twenty pence coins.</p> </div> <div style="text-align: center;">  <p>Lucas</p> <p>I have a ten pound note, a five pound note and thirteen 50 pence coins.</p> </div> </div> <p> PS</p>
<p>9a. Alfie has £11.60 in his piggy bank. He has one note and five coins. What combinations could Alfie have? Find two different ways.</p>  <p> PS</p>	<p>9b. Ryan has £12.75 in his wallet. He has one note and six coins. What combinations could Alfie have? Find two different ways.</p>  <p> PS</p>