

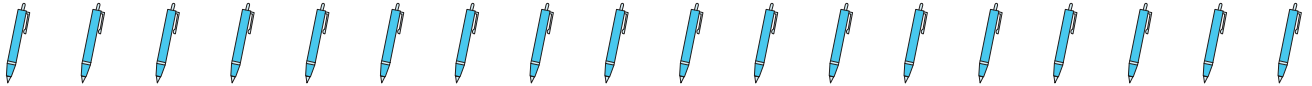
Name : _____

Division Models

Sheet 1

Divide the objects into indicated groups and write the division sentences.

1) Divide into groups of 2.



$$\underline{\hspace{2cm}} \div \underline{\hspace{2cm}} = \underline{\hspace{2cm}}$$

2) Divide into groups of 5.



$$\underline{\hspace{2cm}} \div \underline{\hspace{2cm}} = \underline{\hspace{2cm}}$$

3) Divide into groups of 6.



$$\underline{\hspace{2cm}} \div \underline{\hspace{2cm}} = \underline{\hspace{2cm}}$$

4) Divide into groups of 3.



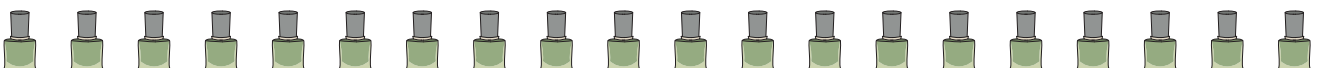
$$\underline{\hspace{2cm}} \div \underline{\hspace{2cm}} = \underline{\hspace{2cm}}$$

5) Divide into groups of 7.



$$\underline{\hspace{2cm}} \div \underline{\hspace{2cm}} = \underline{\hspace{2cm}}$$

6) Divide into groups of 4.

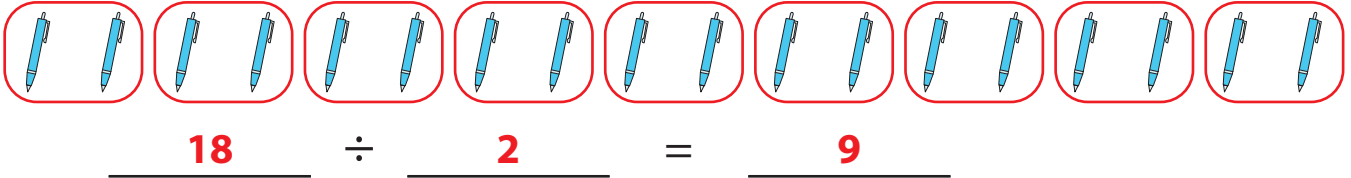


$$\underline{\hspace{2cm}} \div \underline{\hspace{2cm}} = \underline{\hspace{2cm}}$$

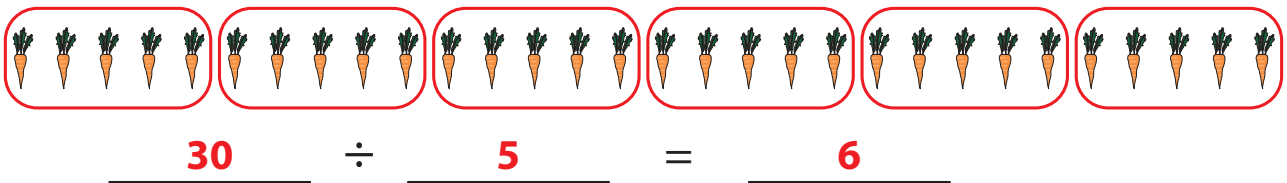
Division Models

Divide the objects into indicated groups and write the division sentences.

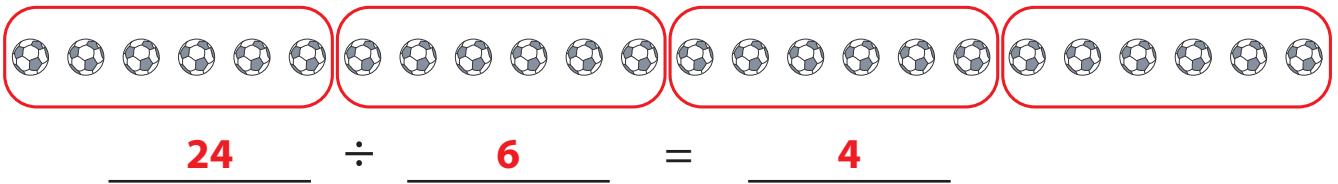
- 1) Divide into groups of 2.



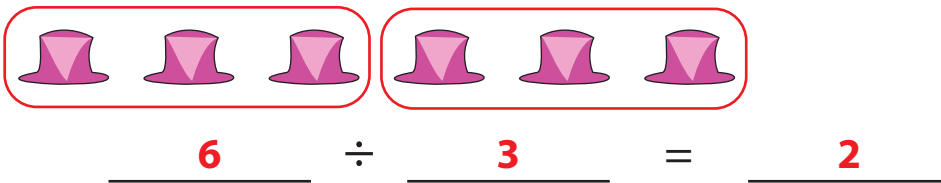
- 2) Divide into groups of 5.



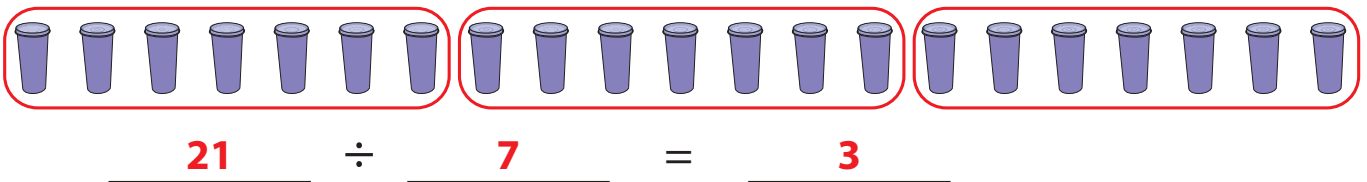
- 3) Divide into groups of 6.



- 4) Divide into groups of 3.



- 5) Divide into groups of 7.



- 6) Divide into groups of 4.

