







Dividing by 2.

For each set of circles divide them by 2 and use different colours to show this. Make sure you write the number sentence for each one.



$$4 \div 2 = 2$$





Extra Challenge.

What would happen if you had 7 circles?



What about 15 circles?

Can you spot a pattern?