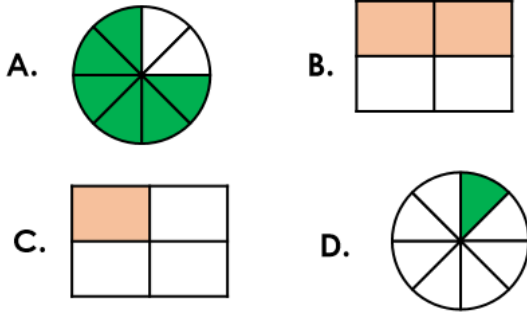


7a. Simon has put these fractions in order from smallest to largest. Is he correct?

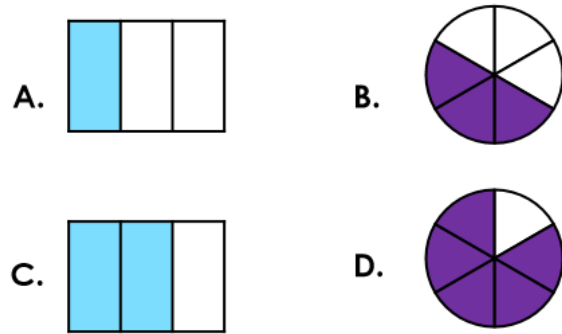


Explain your answer.



R

7b. Dylan has put these fractions in order from smallest to largest. Is he correct?



Explain your answer.

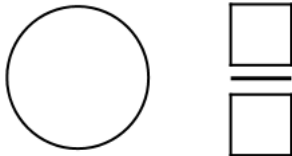


R

8a. Identify the fractions and pattern shown by the images below.



Colour and write the next fraction in the pattern.



PS

8b. Identify the fractions and pattern shown by the images below.

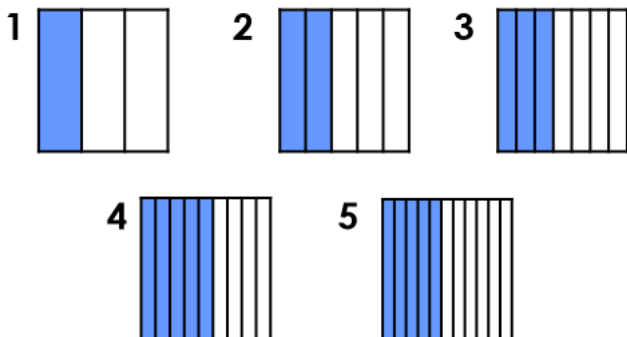


Colour and write the next fraction in the pattern.



PS

9a. Which is the incorrect fraction in this sequence?

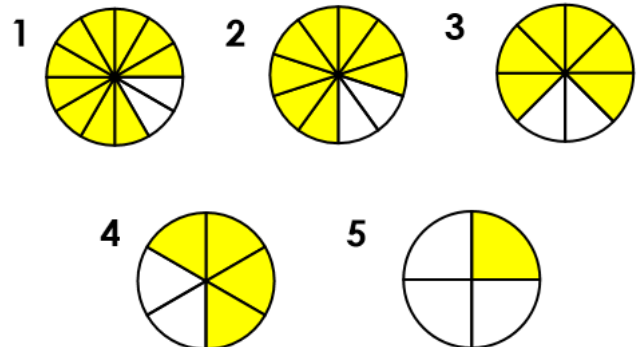


Explain your answer.



R

9b. Which is the incorrect fraction in this sequence?



Explain your answer.



R