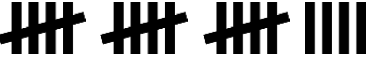





Make Tally Charts

5a. Match the tallies to their totals.





- A.  21
- B.  13
- C.  7
- D.  19



VF

Make Tally Charts

5b. Match the tallies to their totals.

- A.  5
- B.  26
- C.  14
- D.  9



VF

6a. Complete the tally to match the totals.

Meals	Tally	Total
Pie		24
Pizza		12
Curry		15
Wraps		6



VF

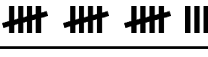
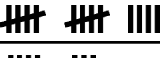


6b. Complete the tally to match the totals.

Toys	Tally	Total
Doll		4
Car		23
Robot		11
Train		17



VF


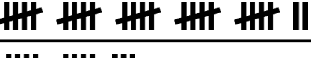

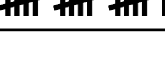
7a. Complete the totals to match the tallies and order the fruits from most to least popular.

Fruit	Tally	Total
Apple		
Pear		
Plum		
Banana		



VF

7b. Complete the totals to match the tallies and order the sports from least to most popular.

Sports	Tally	Total
Football		
Tennis		
Rugby		
Hockey		



VF

8a. Sam did a bug hunt in his garden. He saw 9 worms, 5 beetles, 23 ladybirds and 17 spiders.

Bugs	Tally	Total
Worm		
Spider		
Beetle		
Ladybird		

Complete the tally chart.



VF

8b. Malikah did a survey of favourite cakes. 24 liked chocolate, 13 liked lemon, 6 liked coffee and 21 liked cherry.

Cakes	Tally	Total
Chocolate		
Lemon		
Coffee		
Cherry		

Complete the tally chart.



VF