




## Make Tally Charts

1a. Class 1 counted the traffic passing school. They started their tally chart then...

*three more cars passed by,  
two more bikes went by,  
four more lorries passed by.*

Traffic	Tally	Total
	I	
	I	
		

Complete the tally chart.






PS

## Make Tally Charts

1b. Class 2 counted the traffic passing school. They started their tally chart then...

*three more cars went by,  
two more motorbikes passed by,  
five more buses passed by.*

Traffic	Tally	Total
		
		
		

Complete the tally chart.



PS

2a. Class 3 surveyed the wildlife in the school grounds.

*Frogs were the most common.  
Squirrels were the least common.  
They saw an odd number of mice.*

Wildlife	Tally	Total
		4
		10
		7

Add the correct names to the tally chart.



PS

2b. Class 4 did a survey of favourite sports.

*Tennis was the least popular.  
Golf was the most popular.  
More than 10 children like hockey.*

Sports	Tally	Total
		12
		2
		14

Add the correct names to the tally chart.



PS

3a. Jen carried out a survey of bed times. She says,



Fourteen children go to bed at 8pm.

True or false? Explain how you know.

Time	Tally	Total
7pm		
8pm		
9pm		



R

3b. Suni counted the colours of sweets in a jar. He says,



Most sweets in the jar were red.

True or false? Explain how you know.

Colours	Tally	Total
Red	I	
Pink		
Green	I	



R