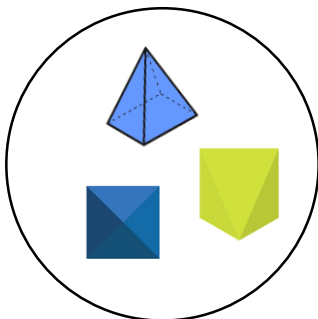
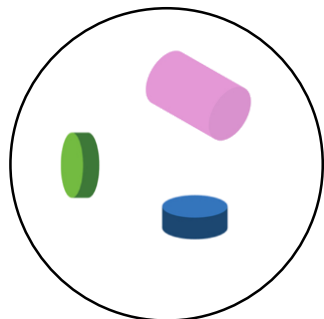


Sort 3D Shapes

4. Use the sorting hoops to complete the statements below.

Set A

Set B



The shapes in set A have edges.

The shapes in set B have edges.

Name a shape that could not be sorted into either group.

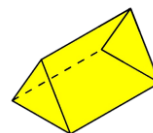
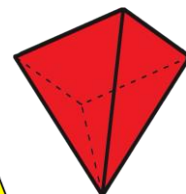
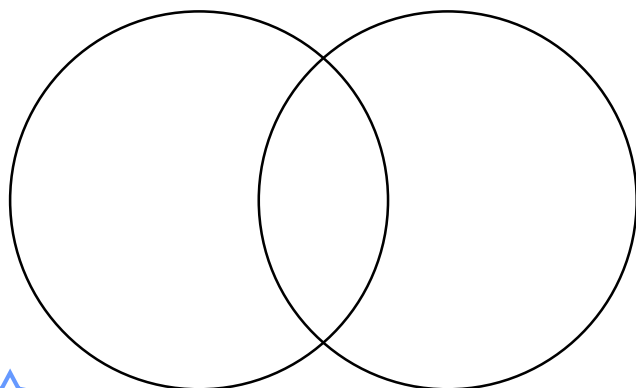


VF
HW/Ext

5. Circle the shape that cannot be sorted into the Venn diagram.

More than
4 vertices

More than
9 edges



VF
HW/Ext

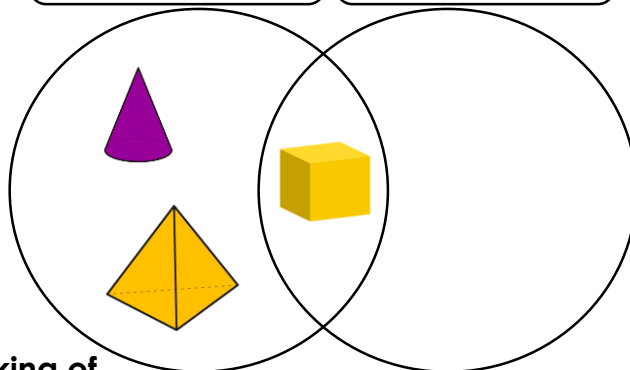
6. Shona is sorting 3D shapes using a Venn diagram.



I can think of 2 shapes that fit in the empty group.

Even number of
faces/surfaces

More than 4
vertices



Name 2 shapes that Shona could be thinking of.



RPS
HW/Ext