





The 10 Times Table

The 10 Times Table

1a. Match the calculations to the correct answers.





1×10 3×10 
  
 5×10

Write two multiplications to match the odd one out.



PS

1b. Match the calculations to the correct answers.

 2×10 
 4×10  
 6×10


Write two multiplications to match the odd one out.



PS

2a. Fabian is solving multiplications.

He says,



10×4 is the same as 4×10

Is he correct? Explain your answer.



R

2b. Emily is solving multiplications.

She says,



10×2 is the same as 2×10

Is she correct? Explain your answer.




R

3a. Eggs are sold in boxes of 10.

Louise buys 3 boxes.

How many eggs does she have?



Explain how you know.




R

3b. Cookies are sold in bags of 10.

Adrian has 5 bags.

How many cookies does he have?



Explain how you know.



R