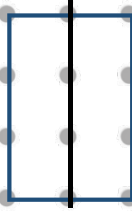
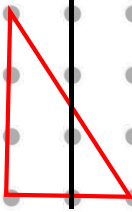


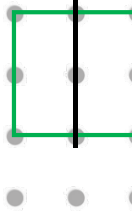
Lines of Symmetry


Lines of Symmetry

1a. Tick the shapes that have a vertical line of symmetry drawn correctly.

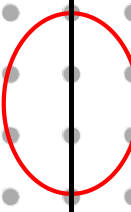
A. 

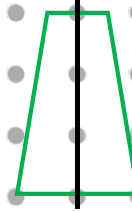
B. 

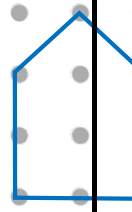
C. 


 VF

1b. Tick the shapes that have a vertical line of symmetry drawn correctly.


A. 

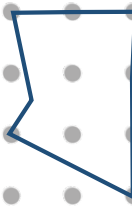
B. 


C. 


 VF

2a. Tick the shapes that have a vertical line of symmetry.


A. 

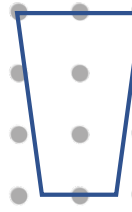
B. 

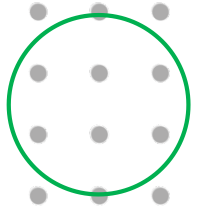
C. 


 VF

2b. Tick the shapes that have a vertical line of symmetry.


A. 


B. 

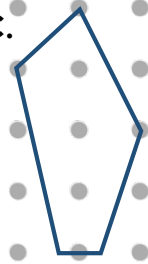
C. 


 VF

3a. Draw a vertical line of symmetry on all the shapes that are symmetrical.

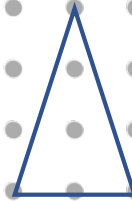
A. 

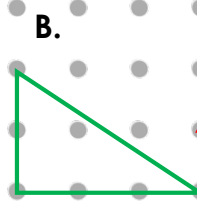
B. 

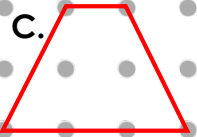
C. 


 VF

3b. Draw a vertical line of symmetry on all the shapes that are symmetrical.


A. 

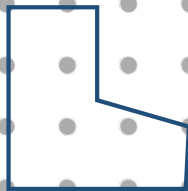
B. 

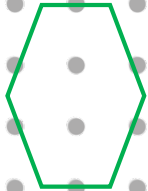
C. 

 VF

4a. Match the shapes to the correct label.

A. 


B. 

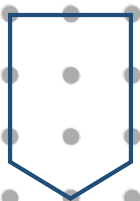
C. 

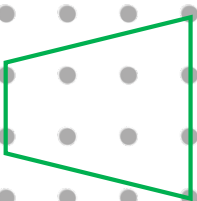
vertical line of symmetry

no vertical line of symmetry

4b. Match the shapes to the correct label.

A. 

B. 

C. 

no vertical line of symmetry

vertical line of symmetry

