


Describing Turns


1a. Draw what the shape would look like after a half turn anti-clockwise.



VF


Describing Turns

1b. Draw what the shape would look like after a half turn clockwise.



VF

2a. Draw what the shape would look like after a quarter turn clockwise.



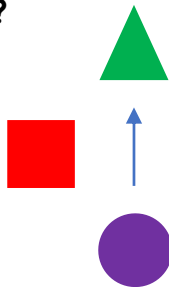
VF

2b. Draw what the shape would look like after a quarter turn anti-clockwise.



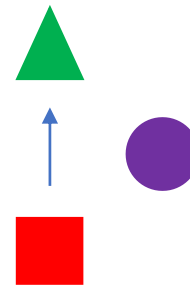
VF

3a. Which shape would the arrow be pointing at after a quarter turn anti-clockwise?



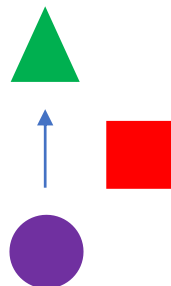
VF

3b. Which shape would the arrow be pointing at after a quarter turn clockwise?



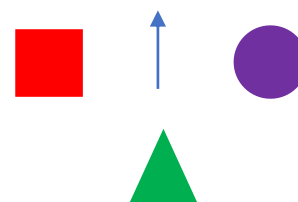
VF

4a. Which shape would the arrow be pointing at after a half turn clockwise?



VF

4b. Which shape would the arrow be pointing at after a half turn anti-clockwise?



VF