

## Describing Turns

## Describing Turns

5a. Describe how the triangle has moved.



This triangle has made a \_\_\_\_\_ turn.



VF

5b. Describe how the triangle has moved.



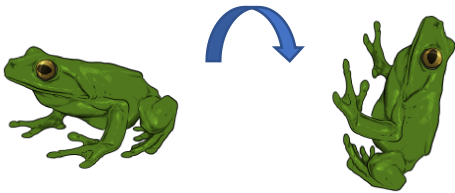
This triangle has made a \_\_\_\_\_ turn.



VF

6a. True or false?

The frog has made a quarter turn anti-clockwise.



VF

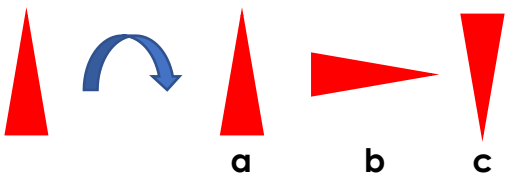
6b. True or false?

The frog has made a whole turn clockwise.



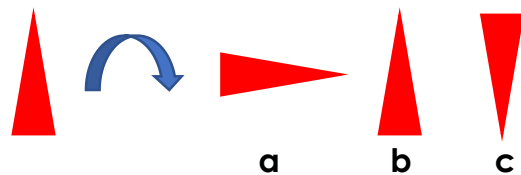
VF

7a. The triangle makes a whole turn clockwise. Which one is it now?



VF


7b. The triangle makes a half turn anti-clockwise. Which one is it now?



VF

8a. True or false?


The shape could have made a three quarter turn to get to its new position.



VF

8b. True or false?

The shape could have made a three quarter turn to get to its new position.



VF