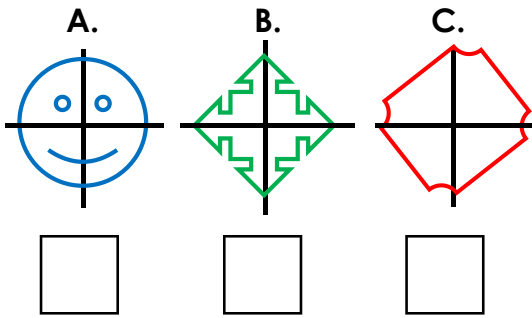


Lines of Symmetry

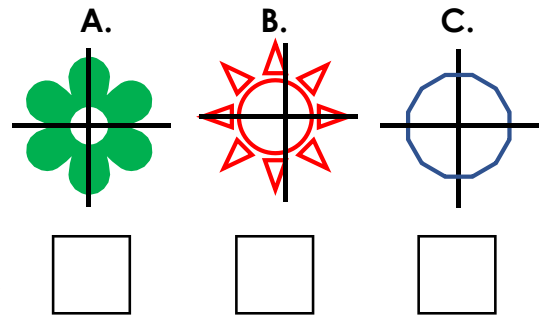
9a. Tick the shapes that have a vertical and horizontal line of symmetry drawn correctly.



VF

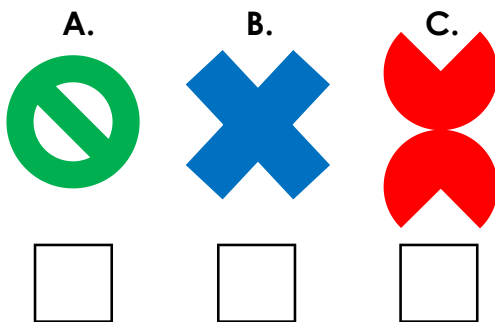
Lines of Symmetry

9b. Tick the shapes that have a vertical and horizontal line of symmetry drawn correctly.



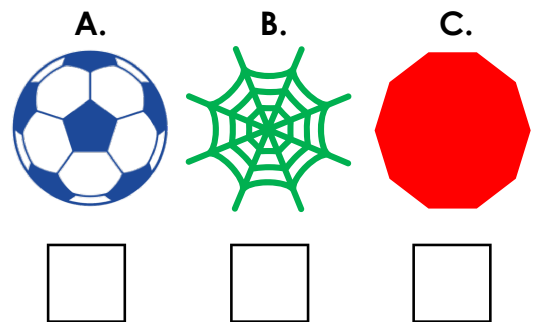
VF

10a. Tick the shapes that have vertical and horizontal lines of symmetry.



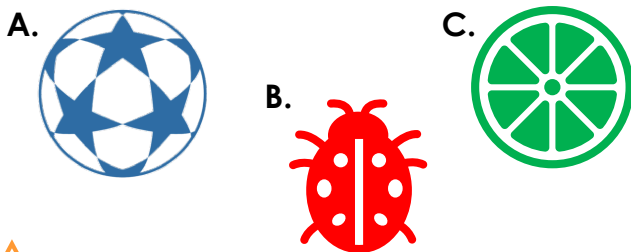
VF

10b. Tick the shapes that have vertical and horizontal lines of symmetry.



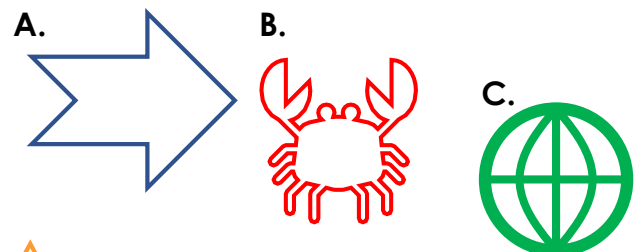
VF

11a. Draw vertical and/or horizontal lines of symmetry where appropriate.




VF

11b. Draw vertical and/or horizontal lines of symmetry where appropriate.



VF

12a. Match the shapes to the correct label.



vertical
line of
symmetry


horizontal
line of
symmetry

No line of
symmetry



VF

12b. Match the shapes to the correct label.



vertical
line of
symmetry

horizontal
line of
symmetry

No line of
symmetry



VF