

# The 10 Times Table

# The 10 Times Table

5a. True or false?



If I multiply 4 by 10 the answer will be 40.



VF

5b. True or false?




If I multiply 0 by 10 the answer will be 10.



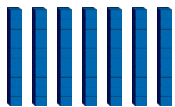
VF

6a. Use  $<$ ,  $>$  or  $=$  to compare the statements below.




$3 \times 10$

$0 \times 10$




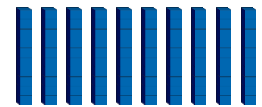

$10 \times 7$



VF

6b. Use  $<$ ,  $>$  or  $=$  to compare the statements below.

$10 \times 10$





$8 \times 10$

$4 \times 10$



VF

7a. Circle the correct calculation to match the array below.



A.  $0 \times 10$


B.  $7 \times 10$

C.  $12 \times 10$



VF

7b. Circle the correct calculation to match the array below.



A.  $3 \times 10$

B.  $8 \times 10$

C.  $2 \times 10$



VF

8a. Choose the correct numbers to complete the calculation.

$\square = \square \times 10$

17

70

7



VF

8b. Choose the correct numbers to complete the calculation.

$\square = \square \times 10$

90

10

9



VF