


## Make Tally Charts

1a. Match the tallies to their totals.

A. 

B. 

C. 

D. 

5

12

9

3



VF

## Make Tally Charts

1b. Match the tallies to their totals.

A. 

B. 

C. 

D. 

13

4

10

8



VF

2a. Complete the tally to match the totals.

Animals	Tally	Total
Cow		11
Hen		6
Pig		14



VF




2b. Complete the tally to match the totals.

Colours	Tally	Total
Pink		7
Red		2
Green		15



VF




3a. Complete the totals to match the tallies.

Pets	Tally	Total
Dog		
Cat		
Fish		



VF

3b. Complete the totals to match the tallies.

Birds	Tally	Total
Crow		
Robin		
Jay		



VF

4a. Beth counted traffic on her street. She saw 15 cars, 7 buses and 4 motorbikes.

Traffic	Tally
Cars	
Buses	
Motorbikes	

Complete the tally chart.



VF

4b. Raj counted animals at the zoo. He saw 14 monkeys, 11 lions and 6 tigers.

Zoo Animals	Tally
Monkey	
Lion	
Tiger	

Complete the tally chart.



VF